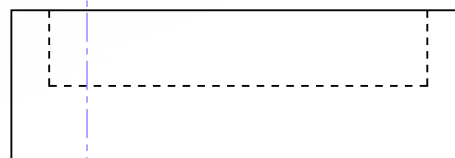



PLAN




ELEVATION

DRAWING TITLE:	SECTIONS 6
COURSE :	HIGHER GRAPHIC COMMUNICATION
PUPIL NAME :	
SCALE:	1:1
NOTES:	<ol style="list-style-type: none"> <li>1. COMPLETE THE END ELEVATION</li> <li>2. COMPLETE SECTION A-A</li> <li>3. CREATE A TWO-POINT PERSPECTIVE SKETCH OF THE BLOCK</li> <li>4. MEASURE YOUR DRAWING AND CREATE A 3D CAD MODEL OF THE BLOCK</li> </ol>



SECTION A-A



END ELEVATION